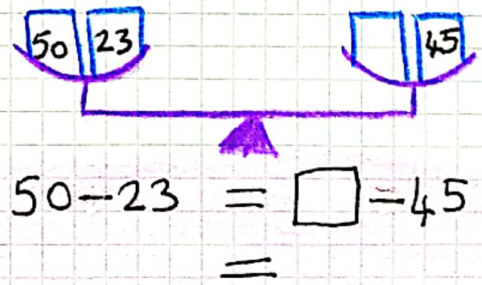
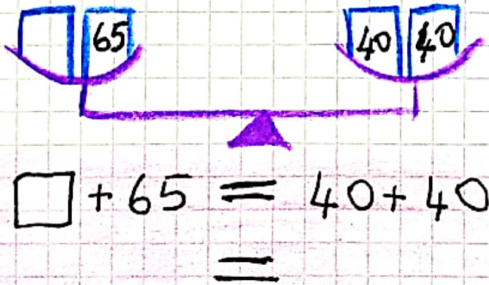
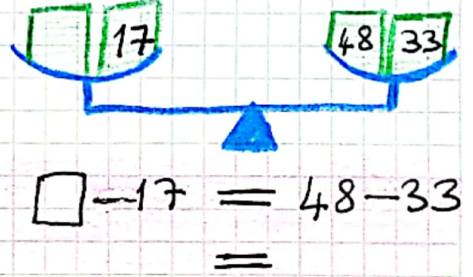
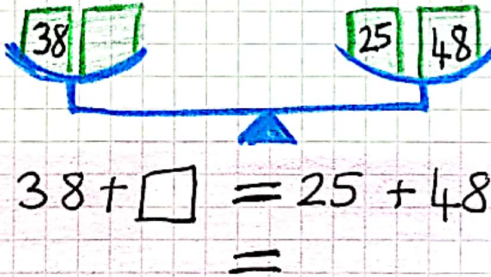
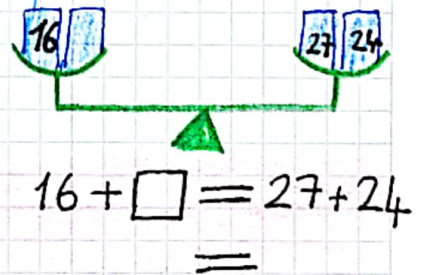
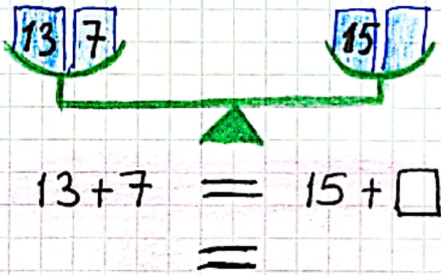
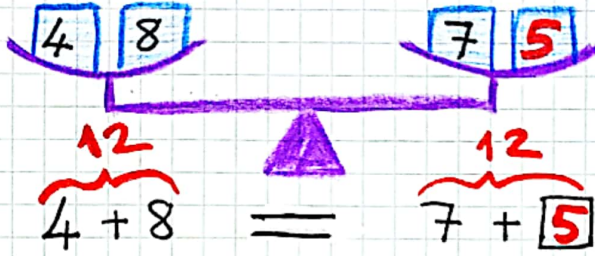


EŞİT İŞARETİNİN KAVRAMI

Eşit İşareti: Eşittir işaretinin sağındaki ve solundaki işlemlerin sonucunun aynı olduğu anlamına gelmektedir.



ETKİNLİK

* Aşağıdaki eşitliklerin sağlanması için boş bırakılan yerlere gelmesi gereken sayıları yazınız.

$$\square + 7 = 6 + 4$$
$$=$$

$$12 + 7 = \square + 9$$
$$=$$

$$24 - 12 = \square - 13$$
$$=$$

$$29 - \square = 45 - 34$$
$$=$$

$$\square + 12 = 14 + 18$$
$$=$$

$$\square + 29 = 43 + 5$$
$$=$$

$$\square + 45 = 43 + 47$$
$$=$$

$$40 - 10 = 16 + 14$$
$$=$$

$$\square - 6 = 4 + 9$$
$$=$$

$$\square - 50 = 15 + 25$$
$$=$$

$$29 + 20 = 85 - \square$$
$$=$$

$$43 + 24 = \square - 11$$
$$=$$

$$54 - 22 = 67 - \square$$
$$=$$

$$\square - 32 = 86 - 52$$
$$=$$