


TAM SAATLER



Yelkovan

Akrep

* Akrep sayının
üzerinde,

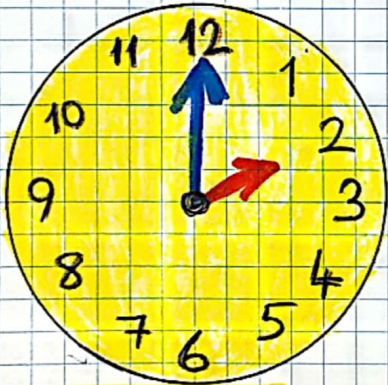
* Yelkovan 12'nin
üzerinde olur.

Saat: 04.00

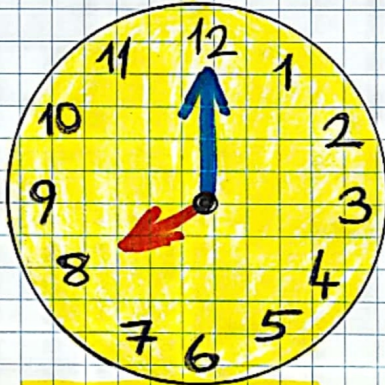
Saat: Dört

Etkinlik:

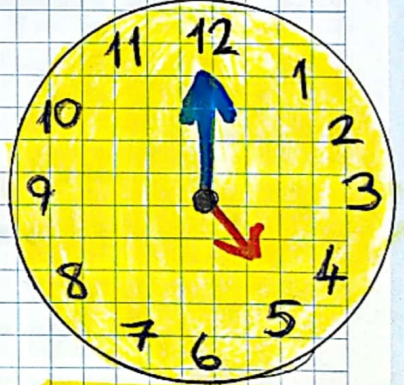
1. Aşağıdaki saatlerin kaçı gösterdiğini altlarına yazınız.



Saat:

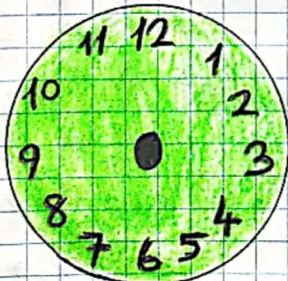


Saat:

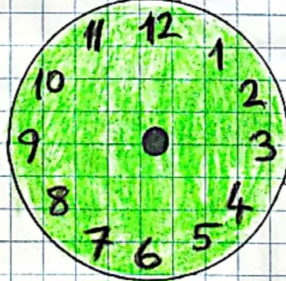


Saat:

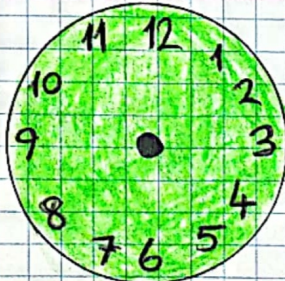
2. Aşağıdaki saatlerin akrep ve yelkovanını çizin.



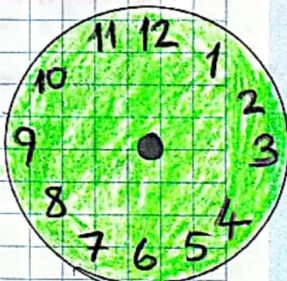
Saat: 04.00



Saat: 06.00



Saat: 09.00



Saat: 11.00

TAM SAATLER ETKİNLİĞİ

1. Aşağıdaki saatlerin kaçı gösterdiğini ve okunuşunu örnekteki gibi altına yazınız.



Saat: 07:00

Saat: Yedi



Saat:

Saat:



Saat:

Saat:



Saat:

Saat:



Saat:

Saat:



Saat:

Saat:



Saat:

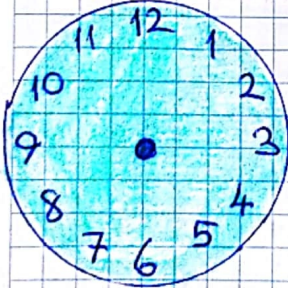
Saat:



Saat:

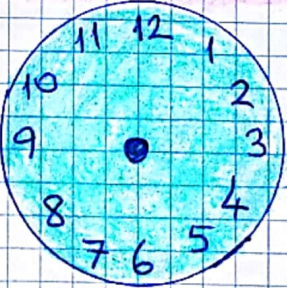
Saat:

2. Aşağıdaki saatlerin akrep ve yelkovanını çiziniz.



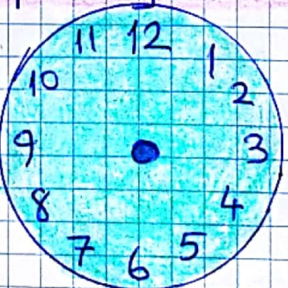
Saat: 01:00

Saat: Bir



Saat: 08:00

Saat: Sekiz



Saat: 12:00

Saat: On iki



Saat: 10:00

Saat: On